

Complete the information for each graph and write its equation in terms of sine and cosine.

- 1) amplitude = _____
 period = _____
 phase shift = _____
 vertical shift = _____

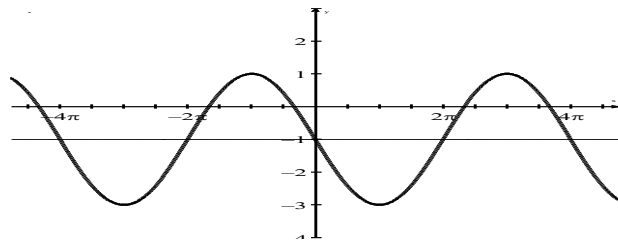
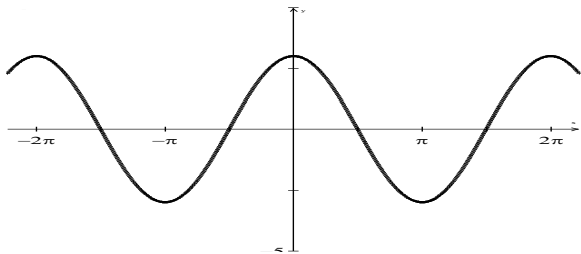
- 2) amplitude = _____
 period = _____
 phase shift = _____
 vertical shift = _____

equation: _____

equation: _____

equation: _____

equation: _____



- 3) amplitude = _____
 period = _____
 phase shift = _____
 vertical shift = _____

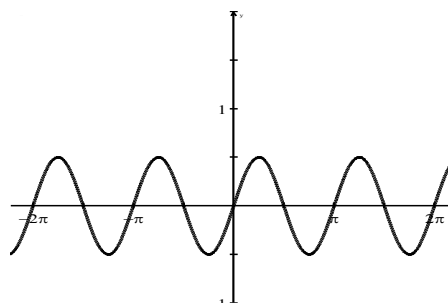
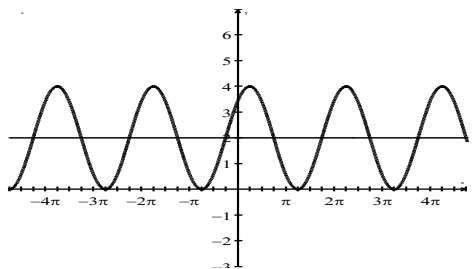
- 4) amplitude = _____
 period = _____
 phase shift = _____
 vertical shift = _____

equation: _____

equation: _____

equation: _____

equation: _____



- 5) amplitude = _____
 period = _____
 phase shift = _____
 vertical shift = _____

- 6) amplitude = _____
 period = _____
 phase shift = _____
 vertical shift = _____

equation: _____

equation: _____

equation: _____

equation: _____

