

1) Write 5.6% as a decimal.

2) What is 8% of 20?

3) $6 - 8 =$

4) -4^2

5) $(3 - 1)^3$

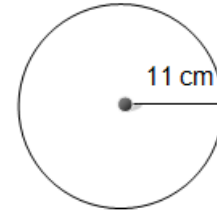
6) $3(-9 + 17)$

7) $5(-8) - 21$

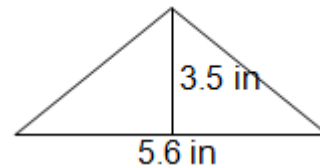
8) $-15 - (-6)$

9) $3(5 + 2) - 8 + 2(3)$

10) What are the diameter and the circumference of the circle below? Use π and not 3.14.



11) Find the area of the triangle. Make sure to label!



1) Write 5.6% as a decimal.

2) What is 8% of 20?

3) $6 - 8 =$

4) -4^2

5) $(3 - 1)^3$

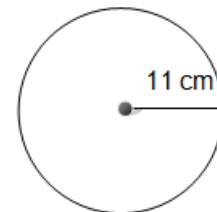
6) $3(-9 + 17)$

7) $5(-8) - 21$

8) $-15 - (-6)$

9) $3(5 + 2) - 8 + 2(3)$

10) What are the diameter and the circumference of the circle below? Use π and not 3.14.



11) Find the area of the triangle. Make sure to label!

